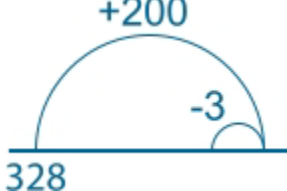
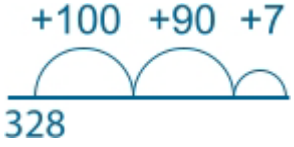
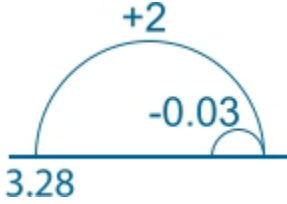
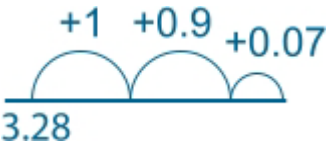
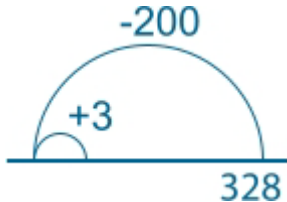
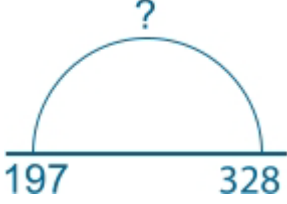
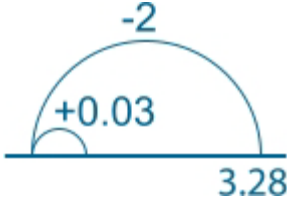
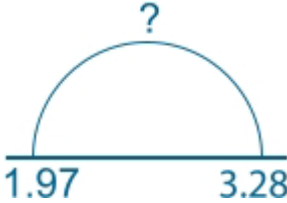


Addition and subtraction card sort

$\begin{array}{r} 328 \\ +197 \\ \hline \end{array}$	
	<h1>525</h1>
$\begin{array}{l} 300 + 100 = \\ 20 + 90 = \\ 8 + 7 = \end{array}$	<p>There are 328 people seated in a cinema, there are 197 spare seats. How many seats are there in total in the cinema?</p>
$\begin{array}{r} 3.28 \\ +1.97 \\ \hline \end{array}$	
$\begin{array}{l} 3 + 1 = \\ 0.2 + 0.9 = \\ 0.08 + 0.07 = \end{array}$	<h1>5.25</h1>
	<p>In a cinema a man buys a drink and some sweets. The drink is £3.28, the sweets are £1.97. How much does the man pay in total?</p>
$\begin{array}{r} 328 \\ -197 \\ \hline \end{array}$	

	<p>One cinema in a town has 328 seats. Another in the same town has 197. How many more seats does the first cinema have than the second?</p>
<p>A cinema has 328 seats. 197 of the seats are filled. How many seats are there remaining?</p>	$8 - 7 =$ $120 - 90 =$ $200 - 100 =$
<h1 style="text-align: center;">131</h1>	
$\begin{array}{r} 3.28 \\ -1.97 \\ \hline \end{array}$	
	<p>In a special offer at the cinema drinks are reduced from £3.28 to £1.97. How much do you save?</p>
<p>A man has £3.28 in his pocket. He spends £1.97 on sweets in the cinema. How much money does he have left?</p>	<p>In a cinema a man buys a drink and some sweets. The drink is £3.28, the sweets are £1.97. How much does the man pay in total?</p>
<h1 style="text-align: center;">1.31</h1>	